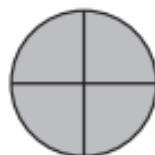


- 1** Circle the rectangles.
Shade the squares.




- 2** Name the shaded parts all together.






- 3** Divide the circles. Color the circle that has smaller parts.
Name the parts.



2 equal parts



4 equal parts



- 4** Use your base-10 blocks.
Make exchanges if you need to.

$$66 + 8 = \underline{\quad}$$



- 5 Writing/Reasoning** Dona's soccer game starts at 4:30. She needs to leave one hour before the game starts. How can Dona use a clock to tell when to leave?

