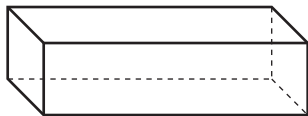


1 Name at least 2 attributes of all trapezoids.

MRB  
127

2 What is a defining attribute of a rectangular prism?



MRB  
134

3 Divide the rectangle into 4 equal shares.

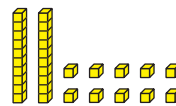


Write a name for one share.

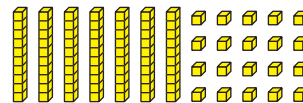
\_\_\_\_\_

MRB  
133

4 Write the numbers.



\_\_\_\_\_



\_\_\_\_\_

MRB  
72

5 **Writing/Reasoning** Use your number grid or base-10 blocks to solve. Explain what you do first.

$$35 + \square = 76$$

MRB  
76-77