

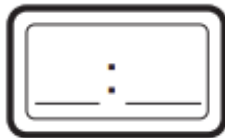
Telling Time

Lesson 9-4

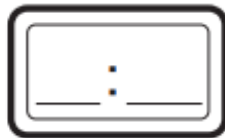
DATE _____

Record the times on the digital clocks.

1



2

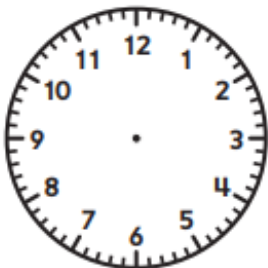
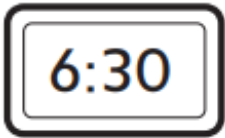


3

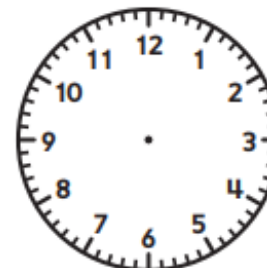
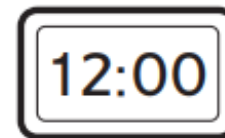


Draw clock hands to show the times.

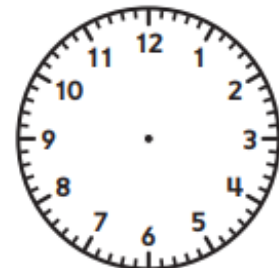

4



5



6



7 Show the time on both clocks.

half-past seven o'clock

